



**RAMAGYA SCHOOL, NOIDA**  
**Class-I/MATHS/APRIL(2017-18)**  
**OLYMPIAD PRACTICE WORKSHEET**

Syllabus: Numbers up to 50

Concept Based Questions

1. How many ones are given in stars?



- (a) 6                      (b) 5                      (c) 4                      (d) 7

2. Choose the correct the number name of 40.

- (a) froty                      (b) fourty                      (c) forty                      (d) fotry

3. Which number is the biggest number?

- (a) 45                      (b) 22                      (c) 37                      (d) 6

4. Which article is in between?



- a) Book                      (b) Eraser                      (c) Pencil                      (d) None of these

5. Which number is the smallest number?

- (a) 24                      (b) 15                      (c) 4                      (d) 39

Application Based Questions

6. What come in between 19 and 21?

- (a) 22                      (b) 25                      (c) 20                      (d) 18

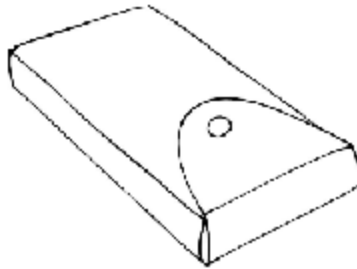
7. Jerry had 8 pencils. He gave 4 pencils to Tina. How many pencils are left with him?

- (a) 3                      (b) 5                      (c) 7                      (d) 4

8. 10 is the sum as

- (a)  $5 + 4$                       (b)  $5 + 5$                       (c)  $5 + 6$                       (d)  $5 + 3$

9. There are 12 crayons in all. How many are in the box?



- (a) 4                      (b) 3                      (c) 5                      (d) 7

10. What is the sum of five and nine?

- (a) Ten                      (b) Thirteen                      (c) Fourteen                      (d) Eleven

### HOTS Questions

11. Which number comes before?



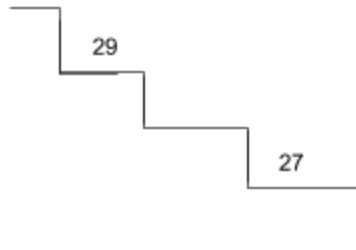
- (a) 32                      (b) 35                      (c) 33                      (d) 34

12. Find all the calculations that total 15.

- (i)  $10 + 3$                       (ii)  $8 + 7$                       (iii)  $10 + 5$                       (iv)  $7 + 7$

- (a) (i) and (ii)                      (b) (ii) and (iii)                      (c) (i) and (iv)                      (d) (iii) and (iv)

13. Find the missing numbers on the stairs?



- (a) Twenty five and Thirty      (b) Twenty six and Twenty eight      (c) Twenty eight and Thirty  
(d) Twenty eight and Twenty nine

14. Reena has 10 flowers. Ravi give five flowers to her. How many flowers does Reena has now?

- (a) 14      (b) 12      (c) 10      (d) 15

15. Which box gives the answer lesser than 5?

- (a)  $10 - 2$       (b)  $2 + 3$       (c)  $7 - 1$       (d)  $2 + 1$

**Value Based Questions**

16.  $\triangle + \circ = 7$   
 $\triangle + \triangle = 8$   
 $\circ + \circ = ?$

- (a) 5      (b) 6      (c) 4      (d) 8

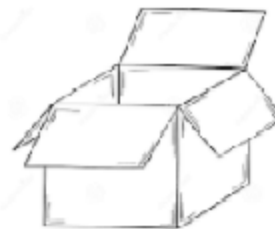
17. Which item is the lightest?



Leaf



Glass



Box



Flowers

- (a) Glass      (b) Box      (c) Flowers      (d) Leaf

18. Five children bought 20 pencils from a shop. Aarti bought 7 pencils, Ellie bought 3 pencils, Raja bought 2 pencils and Priya bought 5 pencils.  
How many pencils did Krish buy?

- (a) 3                      (b) 5                      (c) 7                      (d) 10

19. Here is a series of numbers. The series continues in the same way.

Two     $\longrightarrow$     Four     $\longrightarrow$     Eight     $\longrightarrow$     \_\_\_\_\_

Write the next number in the series.

- (a) Nine                      (b) Five                      (c) Ten                      (d) Three

20. Which item is the heaviest?



Book



Eraser



Flower



Ribbon

- (a) Eraser                      (b) Book                      (c) Ribbon                      (d) Flower