



RAMAGYA SCHOOL, NOIDA
Class –I/MATHS/APRIL (2017-18)
OLYMPIAD PRACTICE WORKSHEET

Syllabus: Numbers up to 50

1. Which animal is in between?



- (a) Mouse (b) Bear (c) rabbit (d) None of these

2. Which number is the biggest number?

- (a) 25 (b) 15 (c) 9 (d) 30

3. Which number is the smallest number?

- (a) 5 (b) 35 (c) 29 (d) 7

4. How many tens are in given buntings?





- (a) 3 tens (b) 1 ten (c) 2 tens (d) 10 tens

5. Choose the correct the number name of 12


- (a) twelve (b) tewlve (c) telwve (d) twleve

6. Which of the following is the correct addition sentence for the picture below?



- (a) $3 + 3$ (b) $3 + 2$ (c) $2 + 2$ (d) $3 + 4$

7. There are 15 balls in all. How many are in the basket.



8. What come in between 48 and 50

- (a) 41 (b) 39 (c) 49 (d) 47

9. Elaine had 5 apples. She ate 3 apples. How many apples are left with her?

- (a) 1 (b) 0 (c) 3 (d) 2

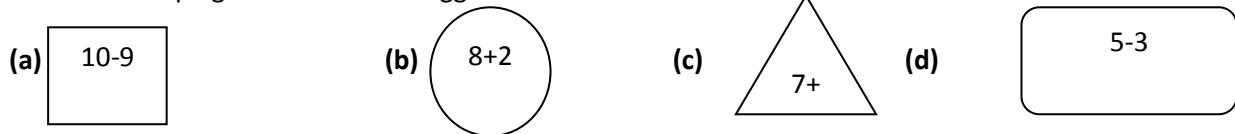
9. What is the sum of seven and eight.

- (a) Ten (b) Eighteen (c) Fifteen (d) Eleven

10. 15 is the sum as

- (a) $10 + 6$ (b) $10+7$ (c) $10+1$ (d) $10+5$


11. Which shape gives the answer bigger than 8?



12. Alia has 12 balls. She gives two balls to her sister. How many ball does Alia has now?

- (a) 10 (b) 12 (c) 14 (d) 0

13. Which number comes after?



- (a) 40 (b) 30 (c) 20 (d) 50

14. Find the missing Numbers in the train?




- (a) One and Four (b) Two and Four (c) Three and Four (d) Six and Four

15. Find all the calculations that total 20 ?

- i) $14 + 7$ ii. $15 + 6$ iii. $10 + 10$ iv. $13 + 13$

- (a) i and iii (b) iv and iii (c) i and iii (d) i and ii

16. Four children find total 30 shells on a beach. Shaina finds 10 shells, Raghav finds 8 shells and Victor finds 2 shells.



How many shells does Amar find?

- (a) 20 shells (b) 30 shells (c) 15 shells (d) 10 shells

17 Here is a sequence of numbers. The sequence continues in the same way.

Three \longrightarrow Four \longrightarrow Five \longrightarrow _____

Write the next number in the sequence.

- (a) Six (b) Seven (c) Eight (d) Two

18. Which item is the heaviest?



Mobile



Pencil




Leaf



Ruler

- (a) Ruler (b) Leaf (c) Mobile (d) Pencil

19. Which toy is the lightest?



Feather



Pillow



Plant



Pot

(a) Pillow

(b) Pot

(c) Plant

(d) Feather

20.

$$\text{Yellow insect} + \text{Green insect} = 6$$

$$\text{Yellow insect} + \text{Yellow insect} = 4$$

$$\text{Green insect} + \text{Green insect} = ?$$

(a) 8

(b) 5

(c) 6

(d) 4