



RAMAGYA SCHOOL, NOIDA
IV/SOCIAL SCIENCE/2017-18
OLYMPIAD PRACTICE WORKSHEET

1. In India, which is called orchid paradise?
1) Andhra Pradesh 2) Odisha 3) Arunachal Pradesh 4) Karnataka

2. Maps that show small areas such as classroom in detail.
1) plans 2) maps 3) scale 4) none of these

3. India is _____ most populated country in the world.
1) First 2) Second 3) Third 4) Seventh

4. When is Earth Day celebrated:
1) April 22 2) May 22 3) May 20 4) June 4

5. On a map, plains and lowland are always shown in _____ colour.
1) white 2) green 3) yellow 4) blue

6. What is currency of Bhutan?
1) Euro 2) Bhutanese Ngultrum 3) Dollar 4) Rupee

7. The four main directions collectively called _____.
1) cardinal 2) symbol 3) scale 4) legend

8. A person who makes map is called _____.
1) Engineer 2) Archaeologist 3) Cartographer 4) Historian

9. The art of drawing map is called _____.
1) Archaeology 2) Engineering 3) History 4) Cartography


10. The lotus in the national emblem symbolises _____.
1) Equality 2) progress 3) power 4) struggle

11. The capital of Telangana is _____
1) Chandigarh 2) Itanagar 3) Hyderabad 4) Ranchi


12. Lines running north to south on earth surface are called_____.
1) Latitudes 2) Longitudes 3) Great circle 4) Prime Meridian

13. A device used to find directions are _____.
1) Compass 2) Divider 3) Map 4) Globe

14. Capital of Sri Lanka is _____.
1) Tokyo 2) Sri Jayawardenepura Kotte 3) Ceylon 4) None of these


15.  Symbol is used to denote _____ in map.
1) Seaport 2) River 3) factory 4) Airport

16. A state along eastern coast of India _____.
1) Maharashtra 2) Kerala 3) Madhya Pradesh 4) Uttarakhand

17. The  is symbol of _____.
1) Partly cloudy 2) Mostly cloudy 3) Sunny Day 4) Thunderstrom

18. CNG is used in _____.
1) Vehicles 2) Airplanes 3) Cycles 4) None of these

19. The green colour of national flag stands for _____.
1) Faith 2) freedom 3) Peace 4) progress

20.  Is a symbol of _____.
1) Factory 2) Apartment 3) Seaport 4) Bridge