









**RAMAGYA SCHOOL,NOIDA**  
**CLASS III/MATHEMATICS/2017-18**  
**OLYMPIAD PRACTICE WORKSHEET**

**Concept Based:**

1.  $127 \times \underline{\hspace{2cm}} = 127$   
a) 2                      b) 3                      c) 4                      d) 1
2. The estimated difference of 58,000 and 57,999 is :  
a) 1                      b) 36                      c) 40                      d) 18
3. Select the odd one out:  
a) VUXY                      b) FEHI                      c) JILM                      d) HGIK
4. What is the difference in the place value of the digits 8 and 6 in the numeral 8962321?  
a) 7994000                      b) 7904000                      c) 7960000                      d) 7940000
5. If wall is called window, window is called door, door is called floor and floor is called ventilator, than what will a person stand on?  
a) Window                      b) Wall                      c) Floor                      d) Ventilator

6. If
-  **+**  **+**  **=** 230
-  **-**  **=** 5 , then what is the value of  ?

**Application Based:**

7. Which of the following option is correct?  
a)  $14-3=1$                       b)  $9-0=0$                       c)  $12-12=0$                       d)  $7-1=8$
8. 1,18,000 is 1 more than-  
a) 1,17,999                      b) 1,17,998                      c) 1,17,997                      d) 1,18,001
9. The estimated sum of 1,499 and 776 to the nearest hundred is-  
a) 2,400                      b) 2,300                      c) 2,200                      d) 2,220

10. What is the missing number in the box?



- a) 3                      b) 5                      c) 2                      d) 0

11. Successor of 420 is:

- a) 364                      b) 360                      c) 421                      d) 110

12. There are \_\_\_\_\_ thousands in 4843.

- a) 48                      b) 486                      c) 3                      d) 4

**Value Based:**

13. Fill in the blanks. : 6 , 11 , 21 , \_\_\_\_\_

- a) 52                      b) 35                      c) 41                      d) 76

14. Mini bought 16 books. Kavleen bought 26 books. How many less books did Mini buy than kavleen?

- a) 29                      b) 48                      c) 64                      d) 10

15. Take away 5999 from 6000 :

- a) 5                      b) 1                      c) 7                      d) 4

16. A number is 18 more than 512.

- a)  $512/18$                       b)  $512 \times 18$                       c)  $512 - 18$                       d)  $512 + 18$

17.  $300 \times 60 =$  \_\_\_\_\_ .

- a) 18000                      b) 13000                      c) 31000                      d) 81000

18. How many shoes are there in 12 pairs ?

- a) 3                      b) 6                      c) 8                      d) 7

**HOTS:**

19. The number of zeros in the product of the smallest 3- digit number and the smallest 4- digit number is \_\_\_\_\_ .

- a) 5                      b) 6                      c) 8                      d) 7

20. Two dozen eggs + 2 = \_\_\_\_\_ eggs .

- a) 16                      b) 6                      c) 18                      d) 14