



RAMAGYA SCHOOL, NOIDA
CLASS I/MATHEMATICS/2017-18
OLYMPIAD PRACTICE WORKSHEET

Syllabus: Numbers up to 50, Ordinal
Numbers, Number Names till 30, Number
Combination, Addition up to 20

Concept Based Questions

- Write the correct ordinal number for 7th.
(a) first (b) seventh (c) third (d) fifth
- Choose the correct the number name of 15.
(a) fiveteen (b) fiftin (c) fifteen (d) fivety
- Which number is bigger than 36?
(a) 7 (b) 20 (c) 22 (d) 48
- Tick on the correct spelling of 4th?
(a) fourth (b) forth (c) foruth (d) froth
- Which number is the smaller than 28?
(a) 31 (b) 43 (c) 18 (d) 29

Application Based Questions

- What comes in between 39 and 41?
(a) fifty (b) thirty (c) twenty (d) forty

7. A fruit seller has 11 apples and 6 oranges. How many fruits the fruit seller has in all?

(a) 16

(b) 15

(c) 17

(d) 18

8. What is the sum of twelve and five?

(a) ten

(b) seventeen

(c) eighteen

(d) sixteen

9. What will be the new position of red heart if we place it after yellow heart?




(a) fourth

(b) first

(c) third

(d) fifth

10. Count the hearts and choose the correct number name.



(a) twelve

(b) ten

(c) eleven

(d) nine

HOTS Questions

11. Tick on the correct missing number?



(a) thirty three & thirty five (b) thirty & thirty two (c) thirty six & thirty (d) thirty & forty

12. Write the given numbers in ascending order.

11, 9, 17, 15

(a) 9,11,15,17

(b) 17,15,11,9

(c) 9,11,15,17

(d) 9,17,15,11

13. Find the missing numbers in the given sequence

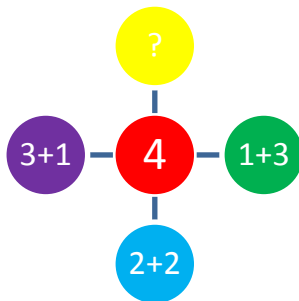


- (a) 23,25 (b) 22,26 (c) 21,23 (d) 24,25

14. Tick on the correct number combination of number 7?

- (a) 3+2 (b) 2+4 (c) 3+4 (d) 1+4

15. Tick on the missing number combination of number 4?



- (a) 0+4 (b) 2+3 (c) 1+4 (d) 3+3

Value Based Questions

16. ○ ○ ○ + ○ ○ = 5

△ △ △ + △ = 4

○ ○ ○ ○ ○ + △ △ △ △ = ?


(a) 7

(b) 9

(c) 8

(d) 10

17. Which item is the biggest?



(a) Backpack

(b) Eraser

(c) Glue

(d) pencil

18. Look at the picture below.



Which article lies at third place?

(a) Paint

(b) apple

(c) computer

(d) lunch

19. Here is a series of numbers. The series continues in the same way.

Nine \longrightarrow Ten \longrightarrow Eleven \longrightarrow

Write the next number in the series.

(a) Eight

(b) Twelve

(c) Ten

(d) Thirteen

20. Tick the odd one out?



(a) Scissors

(b) Markers

(c) Glue Stick

(d) Bus