




RAMAGYA SCHOOL, NOIDA
I /CYBER/2017-18
OLYMPIAD PRACTICE WORKSHEET

LOGICAL REASONING

Q1. The bird are flying _____ the hills.

- a. On
- b. Below
- c. Above
- d. Inside



Q2. Abhi is going to school in the _____

- a. Morning
- b. Evening
- c. Night
- d. Afternoon

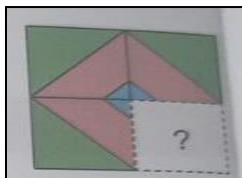


Q3. How many bells each are there in 2 equal groups of bells ?



- a. 2
- b. 3
- c. 4
- d. 5

Q4. Complete the figure pattern.



A.		B.	
C.		D.	


COMPUTER SCIENCE

Q1. Arrange the given picture (numbered as 1,2,3 and 4) in the CORRECT order of steps for shutting down the computer.




- A. 1-2-3-4
- B. 2-3-4-1
- C. 3-2-4-1
- D. 4-2-1-3

Q2. In which of the following areas computers are used to diagnose diseases?



Q3. In which of the following drawings Rectangle tool is used in MS-Paint ?



Q4. Rahul is doing some work on the computer as shown here. He is _____ on computer.

- A. Making shapes
- B. Watching movies
- C. Solving sums
- D. Playing games.



Q5. . The Start button is present at the _____ corner of the computer screen (by default).


- A. Bottom right
- B. Top left
- C. Bottom left
- D. Top right

Q6. Complete the following sentence.



A. _____ is the small blinking line on the _____ of a computer.

- A. Button, Keyboard
- B. Key, screen
- C. Cursor, Monitor
- D. Bar, Printer

Q7. The name of which of the following parts can be formed with the help of given keys ?



Q8. Select the difference(s) between real mouse and computer mouse.

			
<ul style="list-style-type: none">1. It can run.2. It has buttons.3. It can eat.4. It may bite.	<ul style="list-style-type: none">It cannot run.It does not have buttons.It can not eat.It never bites.		
A. Only 1	B. Both 2 and 3	C. Both 2 and 4	D. 1, 3 and 4

Q9. Which of the following types of machine is an example of wearable technology ?.



Q10. Unscramble the words given in the options and identify the word which does not form the name of an MS-Paint tool.

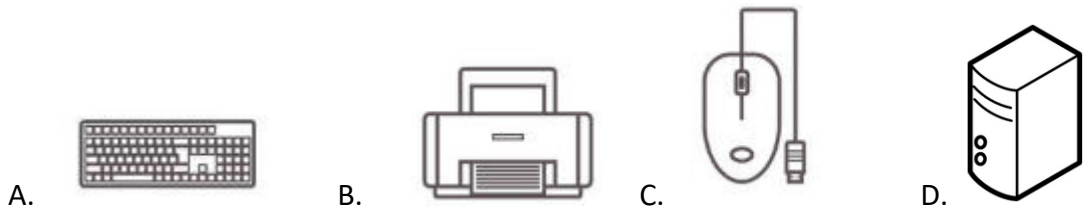
- A. NEPICL
- B. LAVO
- C. NILE
- D. BURBER

Q11. Which of the following statements are CORRECT about Arrow keys ?

1. They are four in number.
2. They are used for moving cursor.
3. They appear at the top – most corner of the keyboard.

- A. Both 1 and 2 B. Both 2 and 3 C. Both 1 and 3 D. All 1 , 2 and 3

Q12. A computer CANNOT start without which of the following parts ?



Q13. Which of the following can be done with the given MS-Paint tool ?

- A. Making free hand drawings
- B. Writing free hand names on drawing canvas
- C. Drawing lines
- D. All of these.



Q14. Which mouse action is performed in the given image ?

- A. Left - click
- B. Right - click
- C. Scrolling
- D. Center-click.

Q15. How many students are using a computer in the given image ?



Q16. The given device is also called as _____

- A. Virtual Data Unit
- B. Visual Data Unit
- C. Very Interactive Machine
- D. Visual Display Unit

