




RAMAGYA SCHOOL, NOIDA
I /CYBER/2017-18
OLYMPIAD PRACTICE WORKSHEET

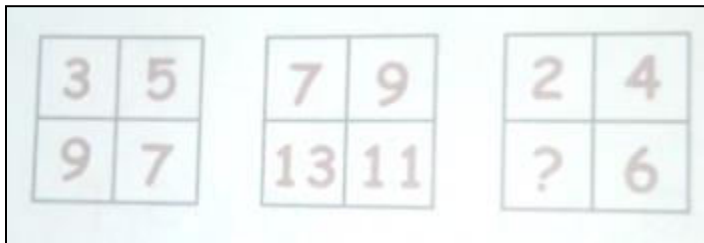
LOGICAL REASONING

Q1. How many apples are outside the box ?

- a. 5
- b. 7
- c. 2
- d. 4




Q2. Find the missing number, if some rule is followed in all the three figures.



- a. 8
- b. 7
- c. 10
- d. 12

Q3. Which of the following costs the least ?



Q4. The children are going to school in the _____ -

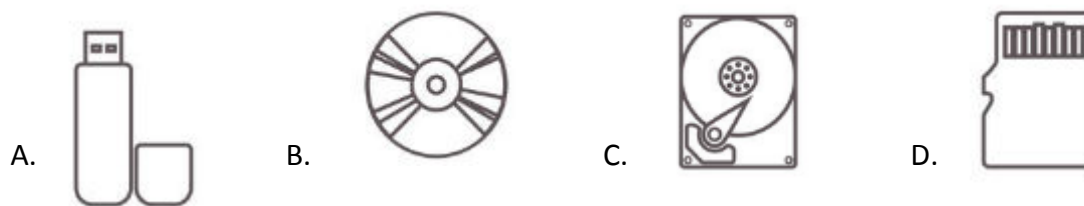
- a. Night
- b. Afternoon
- c. Morning
- d. Evening

COMPUTER SCIENCE

Q1. Which of the following devices can be used to store information?



Q2. Which of the following is the main storage device of the computer?



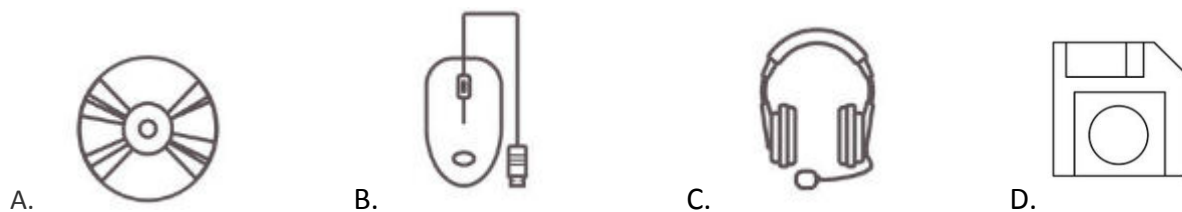
Q3. What is the full form of CD

- A. Computer Disc B. Compact Device C. Compact Disc D. None of these.

Q4. Storage device helps to _____ work done on the computer

- A. run B. play C. store D. output

Q5. Which among the following is a Floppy disk.



Q6. Hard disk is fixed inside the _____ and cannot be seen

- A. Printer
- B. Speakers
- C. System cabinet
- D. None of these

Q7. Desktop and Laptop computers need a CD or DVD drive to play CD or DVD on the computer.

- A. True
- B. False

Q8. Where do we attach a pen drive on the system cabinet.

- A. CD drive
- B. Keyboard
- C. USB port
- D. Printer

Q9. Which among the following can hold more information.

- A. CD
- B. DVD
- C. Both (a) and (b)
- D. None of these.

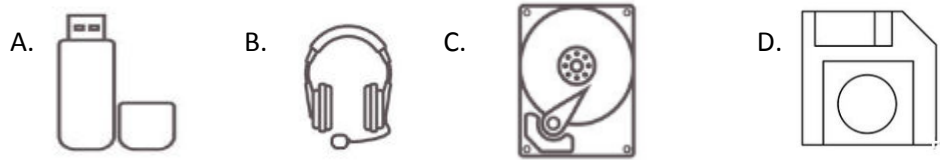
Q10. Pen drive is used to print information.

- A. True
- B. False

Q11. DVD stands for _____

- A. Digital Versatile Disc
- B. Drawing Versatile Disc
- C. Dream Video Disc
- D. None of these.

Q12. Which of the following is a hard disk ?



Q13. We keep our clothes in a _____

- A. Lunch box
- B. bucket
- C. Cupboard
- D. Printer

Q14. Name the internal storage of a computer _____

- A. Floppy
- B. CD
- C. Hard disk
- D. None of these.

Q15. Basic unit of Measurement storage in computer science _____

- A. Kilobyte
- B. Bite
- C. Byte
- D. None of these.

Q16. Amount of data a floppy disk can store

- A. 14 MB
- B. 1.4 GB
- C. 1.4 MB
- D. None of these.