




RAMAGYA SCHOOL, NOIDA
I /CYBER/2017-18
OLYMPIAD PRACTICE WORKSHEET

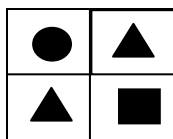
LOGICAL REASONING

Q1. How many erasers are there in each group, if 3 equal groups of eraser are formed ?



- A. 3 B. 4 C. 5 D. 6

Q2. Which of the following figures is similar to the given figure ?



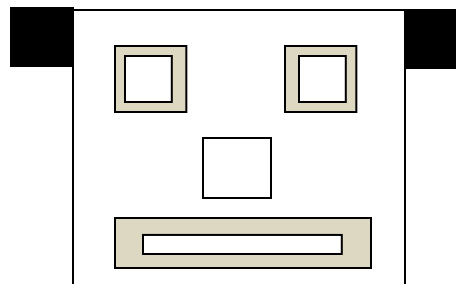
- A. B. C. D.

Q3. At what time and are seen in the sky ?

- A. Evening B. Night C. Afternoon D. Morning

Q4. The figure is made up of _____ squares.

- A. 7
B. 8
C. 9
D. 10



COMPUTERS AND INFORMATION TECHNOLOGY

Q5. Which of the following tasks a computer can do for you ?


- A. Drink water
- B. Eat food
- C. Play music
- D. All of these.

Q6. What is a device ?

- A. It is a machine, designed for a particular purpose .
- B. It is a natural thing, made by nature.
- C. It is an artificial thing, made by nature.
- D. All of these.

Q7. The given device is called _____. It is used to enter _____ into the computer.

- A. Mouse, letters and symbols
- B. Keyboard, letters and symbols
- C. Printer, Photos
- D. Speakers, Photos



Q8. Which of the following games can be played on a computer?

- A. Racing
- B. Cricket
- C. Basketball
- D. All of these.

Q9. Computer in homes CANNOT be used for _____ -

- A. Typing
- B. Watching movies
- C. Playing games
- D. Updating passbooks

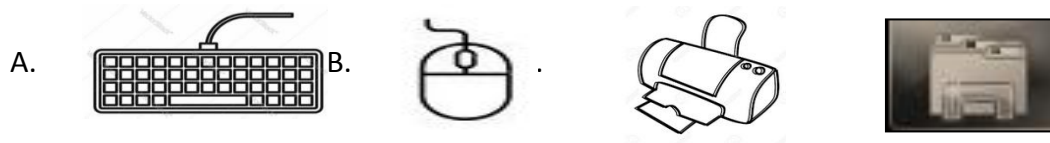
10. With the help of computer, you can _____ ?

- A. Take print out
- B. Search information
- C. Book tickets
- D. All of these.

Q11. The first step to start a computer is to _____

- A. Switch on the main power button
- B. Press the power button on UPS
- C. Press the power button on CPU
- D. Switch on the monitor

Q12. Which of the following devices is used to point and select items on computer screen ?



Q13. Which of the following statements is INCORRECT about alphabet keys ?

- A. They are used for typing letters and words.
- B. There are 26 alphabet keys on the keyboard.
- C. The first six letters of alphabet keys forms the name of a keyboard layout.
- D. The last seven letters of the alphabet keys forms the name of the inventor of keyboard.

Q14. A mouse has a wheel in the center which is called a _____ wheel.

- A. Track
- B. Touch
- C. Scroll
- D. Roll

Q15. Once the computer is on, a screen is displayed, which is called _____




- A. Window
- B. Desktop
- C. Menu
- D. Wallpaper.

Q16. Which of the following tools is used to draw the closed shapes ?

- A. 
- B. 
- C. 
- D. Both (a) and (b)

ACHIEVERS SECTION

Q17. Which of the following shapes can be drawn with Line tool ?

- A. 
- B. 
- C. 
- D. All of these.

Q18. After shutting down the computer, what is the next step to perform ?

- A. Click on Start button
- B. Switch off the UPS
- C. Switch off the CPU
- D. Switch off the Monitor

Q19. Which of the following option safely shut down the computer and then starts it again ?

- A. Log off
- B. Shut down
- C. Restart
- D. Sleep

Q20. _____ clicking the mouse opens an item on computer.

A. Single

B. Double

C. Triple

D. None of these.