



RAMAGYA SCHOOL, NOIDA
II /CYBER/2017-18
OLYMPIAD PRACTICE WORKSHEET

LOGICAL REASONING

Direction (Q1 – Q2) : Study the diagram carefully and answer the following questions.



LEFT Beena Megha Priya Latika Garima

Q1. _____ is 1st from the right end.

- A. Beena B. Megha C. Priya D. Latika E. Garima

Q2. _____ is standing between Megha and Latika.

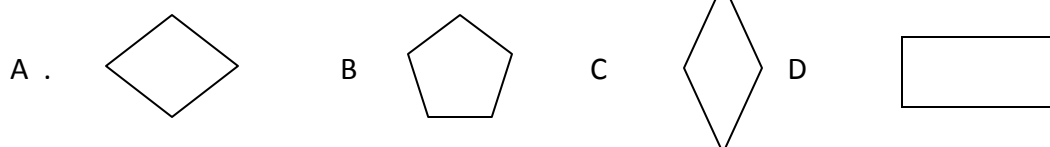
- A. Beena B. Priya C. Garima D. Latika

Q3. Mohit celebrates his birthday on the next day of second Tuesday of August 20XX. On which day he will be celebrating his birthday?

August 20XX						
Sun	Mon	Tue	Wed	Thu	Fri	Sat
	1	2	3	4	5	6
7	8	9	10	11	12	13
14	15	16	17	18	19	20
21	22	23	24	25	26	27
28	29	30	31			

- (A) 9th August (B) 10th August (C) 16th August (D) 8th August

Q4. Choose the odd one out.







COMPUTER SCIENCE

Q1. Sam has performed the following steps to draw rectangle. Which of the following tools will be there in place of [?] in the given steps

Step 1: Select [?]

Step 2: Point the mouse on drawing area.

Step 3: Click and drag the mouse once to draw rectangle.

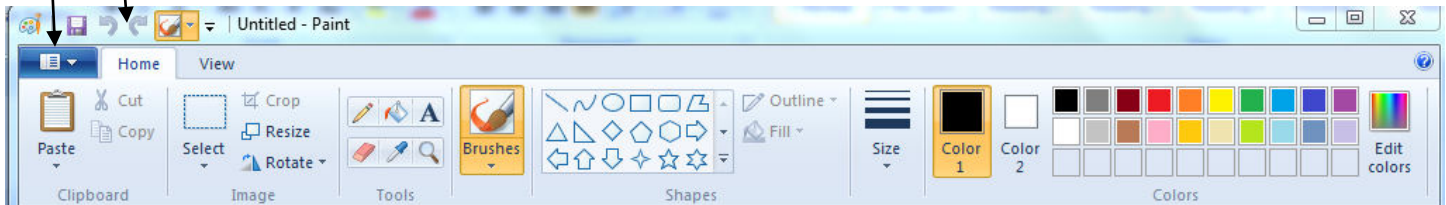
- A.  B.  C.  D. 

Q2. Mohit has drawn a picture of a school having beautiful playground around it. Now, he wants to write the name of the school on this picture. Which tool should he use for that?

- A.  B.  C.  D. 

Q3. Directions (Q3.-Q4) : Answer the questions based on the given snapshot.

1 2



The button marked as 1 can be used for _____

- A. Saving Paint file B. Printing the picture C. Opening Paint file D. All of these.

Q4. The area marked as 2 is called the _____

- A. Paint button B. Quick Access Toolbar C. Ribbon D. Drawing Area

Q5. The tool used to select a portion of drawing, in desired shape, is _____.





- A.  B.  C.  D. 

Q6. Mohit has drawn a picture of a school having beautiful playground around it. Now, he wants to write the name of the school on this picture. Which tool should he use for that ?

- A.  B.  C.  D. 

Q7 The tool used to draw with different kind of _____ shapes is _____



- A.  B.  C.  D. 






Q8. In which group is the Curve tool present?

- A. Colors group B. Shapes group C. Image group D. Text group

Q9. Match the following.

Column – A

Column – B

- | | |
|--|----------------------|
| a.  | 1. Text tool |
| b.  | 2. Color Picker tool |
| c.  | 3. Eraser tool |
| d.  | 4. Curve tool |
| e.  | 5. Rectangle tool |

Q10. Which of the following tools is used to draw a four – sided star?

- A. Triangle tool
B. Four – sided star tool
C. Rectangle tool
D. Oval tool

Q11. Which of the following keys are pressed to open an already existing document ?

- A. Ctrl + S B. Ctrl +V C. Ctrl + L D. Ctrl + O

Q12. Which of the following tools is not a part of the Shapes group?

- A.  B.  C.  D. 

Q13. There are _____ tools in the Tools group of Paint.

- A. Five B. Six C. Ten D. None of these.

Q14. Which of the following tool is used to type text in the drawing area?

- A. Pencil B. Textl C. Magnifier D. Curve

Q15. Which tool is used to make a drawing look bigger?

- A. Magnifier tool B. Select tool C. Curve tool D. Eraser tool

Q16. The Eraser tool is present in the _____ group.

- A. Images B. Shapes C. Tools D. Clipboard