



**RAMAGYA SCHOOL, NOIDA**  
III/EVS/2017-18  
OLYMPIAD PRACTICE WORKSHEET

**Concept based**

Q.1) Which of these is an omnivore?

- a) A cat that eats mice.
- b) A cow that eats grass.
- c) A frog that eats insects .
- d) An opossum that eats fruits and fish


Q.2) Factory : worker :: Cab : ? \_\_\_\_\_

- a) Waiter
- b) Worker
- c) Driver
- d) Dancer

Q.3) The mushroom gets its food :

- a) from dead and decaying plants
- b) from photosynthesis
- c) by eating small insects which come near it
- d) from the water we pour near it.

Q.4) Look at the picture and identify which bird can swim very well in water.



Q.5) Match the following and choose the correct option.

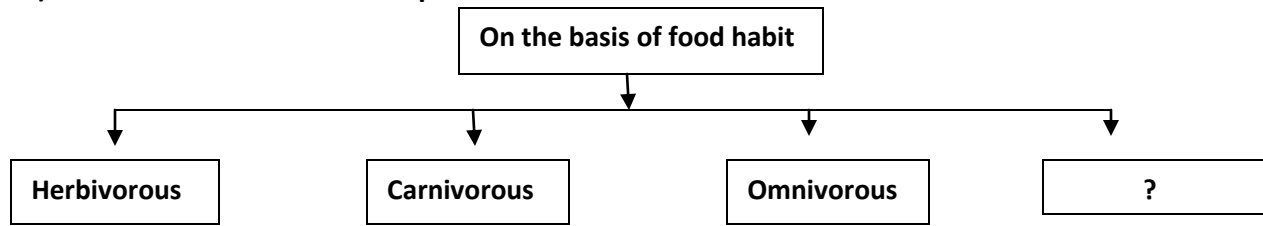
List I		List II	
A	Butter	1	Carbohydrate
B	Meat	2	Calcium
C	Milk	3	Protein
D	Wheat	4	Fat

- a) A-1,B-2,C-3,D-4      b) A-3,B-4 ,C-1,D-2      c) A-4,B-3,C-2,D-1      d) A-2,B-1,C-4,D-3

Q.6) Which of the following is also called monsoon season?

- a) Summer
- b) Rainy
- c) Winter
- d) Spring

Q.7) Fill the blank with correct option



- a) Parasite                      b) Eyesight                      c) Website                      d) None of these

**Application Based**

Q.8) . From the following list find out how many pets are there and how many insects are there.

Bookworm, Parrot, housefly, cat, ants, dog , mosquito , fish , rabbit , moth

- a) 5 pets and 5 insects                      b) 6 pets and 4 insects  
 c) 4 pets and 6 insects                      d) 8 pets and 2 insects

Q9) Which of these activities are NOT done by the post man?

- a) Deliver letters and others posts to respective addresses      b) Take posts to post office  
 c) Take a letter from you and put it in the letterbox              d) Collect all posts from letterbox

Q10) Look at the table carefully.

Herbivore	Carnivore	Omnivore
Cow	Tiger	Human Being
Buffalo	X	Crow

Which of the following animals can be placed in place of X ?

- a) Wolf                      b) Camel                      c) Deer                      d) Cow

Q11) Which of the following activities would need more energy?

- a) Riding a bicycle up a hill                      b) Walking  
 c) Riding a bicycle on level ground                      d) Doing home work

Q12) A : A housewife doesn't do any work.

B : Children do not have any work to do until they complete their education.

- a) Both A & B are true      b) Both A & B are false      c) A is true, B is false      d) A is false , B is true

Q13. Which option will replace “Y” in the table.

Trees	Mango	Orange
Shrubs	Rose	Jasmine
Climbers	Pumpkin	Y

- a) Cucumber                      b) Banyan                      c) Apple                      d) Lotus

Q14) There are few vegetables shown in the picture. Looking at them can you tell, which vegetable of the following is actually a seed?

- a) Carrot  
b) Tomato  
c) Cauliflower  
d) Pea



**HOTS**

Q15) Which of the following is the main difference between a bat and an owl?.

- a) Owl fly in the day, bats in the night  
b) Bats feed on flowers, while owls eat insects  
c) Bats have ears, owls do not  
d) Owls have feathers, beak; bats do not

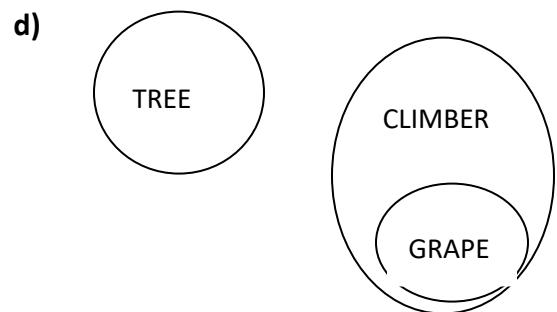
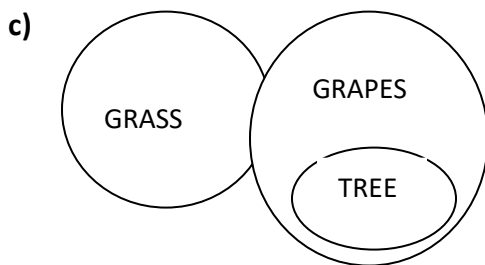
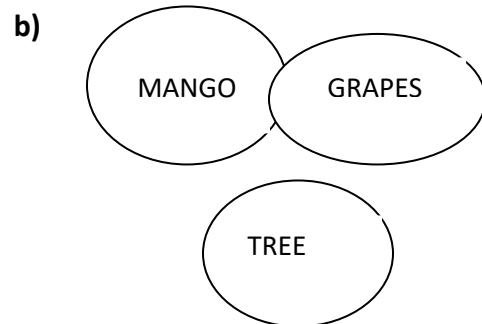
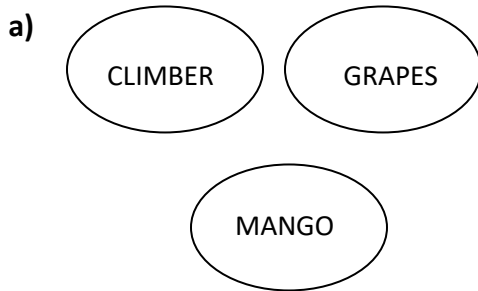
Q16) Cloudy nights are warmer than the clearer nights because:

- a) sun’s rays reach through the clouds.  
b) clouds do not let the heat of the earth out.  
c) clouds give us heat and light.  
d) All of the above

Q17) Mark the statement which is incorrect.

- a) Hoses that are made of bricks and cement are called Pukka house
- b) Slanting roof is used in places of heavy rainfall or snowfall.
- c) Early man used to live in multi-story building.
- d) Nomads used tents and caravans to live.

Q18) Choose the correct option



**VALUE BASED**

Q19) Priya lives on 6<sup>th</sup> Floor in a building .One day her garbage collector got sick, lots garbage was collected in her house. What does she do?

- a) Keep it outside her neighbors house
- b) Throw it done from her window.
- c) Wait for gargbage collector for few more days.
- d) Throw it herself in nearby municipality dustbin.

Q20. Boston give leftover food to stray dogs, Radha throw leftover food in dustbin .Who's action does you think is correct.

- a) Only Radha's
- b) Only Boston's
- c) Both Boston and Radha's
- d) No ones