
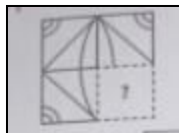




RAMAGYA SCHOOL, NOIDA
I /CYBER/2017-18
OLYMPIAD PRACTICE WORKSHEET


LOGICAL REASONING

Q1. Which of the following options will complete the given figure ?

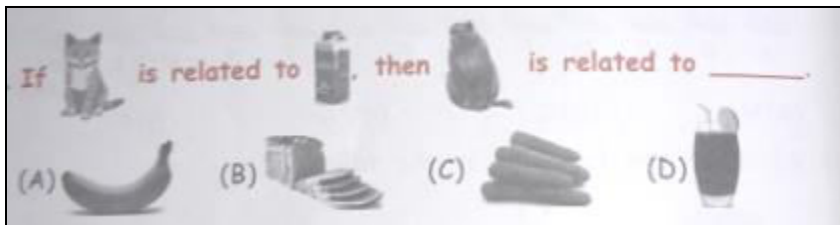


Q2. How many apples are outside the box ?

- a. 5
- b. 7
- c. 2
- d. 4



Q3.






Q4. Select the odd one out.

- a. January
- b. March
- c. May
- d. April

COMPUTER SCIENCE

Q1. What will you see on screen after performing the given steps ?

1. Type Locker
3. Press  key
2. Press  key
4. Press  on Keyboard

A. Locker B. LOCKER C. Locker X D. LOCKER


Q2. The given grid contains names of _____ types of computer.

L	A	P	F	R	A	M	E
D	E	V	I	T	A	P	F
M	D	E	S	K	T	O	P
O	F	R	M	A	A	T	E
B	O	D	A	Y	B	S	R
S	O	C	R	O	L	N	S
E	D	C	T	E	E	P	O
T	S	C	P	H	T	L	N

- A. 1 B. 2 C. 3 D. 4





Q3. A mouse has a wheel in the center which is called a _____

- A. Track B. Touch C. Scroll D. Roll

Q4. You need to CORRECT the spelling of the given grid word using  key.

MONITYIOR

Which of the following is the CORRECT step to do so ?

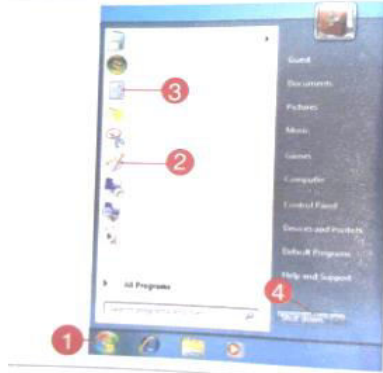
- A. Position the cursor after T and press  key.
B. Position the cursor after M and press  key.
C. Position the cursor after O and press  key.
D. Position the cursor before T and press  key.

Q5. A computer is a fast and intelligent machine. Which of the following is also considered as an intelligent machine ?



Q6. Which of the following options marked by numbers 1, 2, 3 and 4 will you select for opening MS – Paint ?

- A. 1
- B. 2
- C. 3
- D. 4



Q7. Which of the following is an INCORRECT way to work with a computer ?

- A. Playing with cables
- B. Keeping eatables on the computer table
- C. Covering the computer parts
- D. Both A and B

Q8. Select the INCORRECT match.

- A. Click - Gently press the left button of mouse and release it.
- B. Double -click - Press the left button of mouse twice.
- C. Right -click - Press and release the right button of mouse.
- D. Drag and Drop - Press and hold the right button of mouse.

Q9. Arrange the steps given here to draw a circle in MS- Paint.

1. Press the Shift key.
2. Select the Oval tool.
3. Click and drag the mouse.
4. Release the Shift key.
5. Move the mouse pointer to drawing area.

- a. 1→3→2→4→5
- b. 5→4→3→2→1
- c. 3→5→4→1→2
- d. 2→5→1→3→4

Q10. Given here is a grid which contains names of some places where computers are used. How many places can you find ?

B	S	A	I	R	P	O	R	T
A	C	H	O	O	P	E	R	S
S	H	O	P	R	I	N	T	E
N	O	F	F	I	C	E	D	T
K	O	M	R	A	T	L	W	A
S	L	E	A	V	T	I	N	P
T	A	B	O	V	E	S	T	I

- A. 2
- B. 3
- C. 4
- D. 5

Q11. Unscramble the given word and select the CORRECT statement about it.

KETDOPS

- A. Small pictures that you see on computer screen.
- B. Screen that appears after switching on the computer.
- C. Area where drawing is done.
- D. It is the main power switch to start the computer.

- A. Both 1 and 2
- B. Both 2 and 3
- C. Both 1 and 3
- D. All 1, 2 and 3

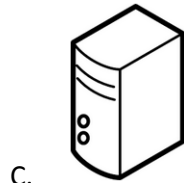
Q12. Select the INCORRECT match.



- Not needed with laptops



- Looks like TV



- First part to switch ON to start a computer



- Compared with a body parts of human

Q13. Which of the following tasks a computer can do for you ?

- A. Drink water
- B. Eat food
- C. Play music
- D. All of these.

Q14. Computer is known as a smart machine, because _____ -

- A. It does not make mistake its own
- B. It never gets tired
- C. It works very fast
- D. All of these.

Q15. Which of the following games can be played on a computer ?

- a. Racing
- b. Cricket
- c. Basketball
- d. All of these.

Q16. A computer mouse is used for _____

- A. Drawing pictures
- B. Playing games
- C. Selecting items
- D. All of these.