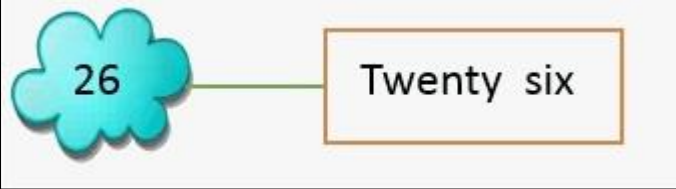
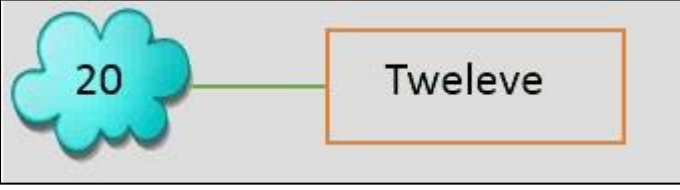


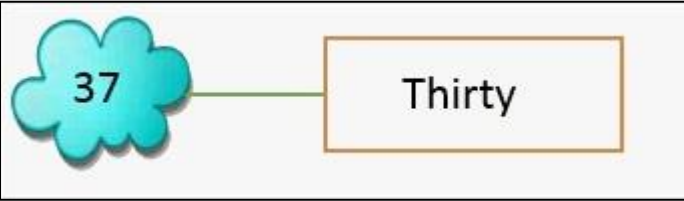


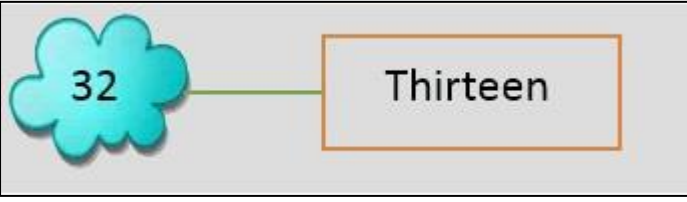
RAMAGYA SCHOOL, NOIDA
I/MATHEMATICS/2018-19
OLYMPIAD PRACTICE WORKSHEET

Q1. Which of the following is a correct match?

a) 

b) 

c) 

d) 




Q2. What is the correct ascending order of 16, 4, 8 and 2?

- a) 16, 2, 8, 4
- b) 2, 16, 8, 4
- c) 2, 4, 8, 16
- d) 2, 4, 8, 16

Q3. What comes between 9 and 11?

- a) 8
- b) 9
- c) 12
- d) 10

Q4. Which figure show equal collection?



Q5. Which of the following are arranged in ascending order?


- a) 13, 4, 5, 7
- b) 17, 9, 10, 11
- c) 4, 5, 6, 7, 3
- d) 12, 13, 15, 18

Q6. How many stars are there in the cloud?



- a) 6
- b) 3
- c) 10
- d) 9

Q7. Which tree has oranges more than 3 but less than 5?



Q8. Number after 57 is

- a) 60
- b) 58
- c) 56
- d) 52

Q9. Which of the following are arranged in descending order?

- a) 22, 10, 26, 15, 18
- b) 4, 6, 8, 10, 15
- c) 2, 5, 1, 6, 10
- d) 21, 19, 15, 12, 11

Q10. What will come in place of “?” mark?




- a) 23
- b) 15
- c) 43
- d) 25

Q11. Which box shows zero pencils in it?



a)



b)



c)



d)

Q12. Number before 94 is

- a) 96
- b) 97
- c) 95
- d) 93

Q13. What is the correct descending order of 40, 30, 10 and 20?

- a) 40, 30, 20, 10
- b) 40, 10, 20, 30
- c) 10, 30, 40, 20
- d) 10, 20, 30, 40


Q14. What comes after 66?

- a) 65
- b) 64
- c) 70
- d) 67

Q15. Which box shows 6 roses?






Q16. Which number comes in between?





- a) 17
- b) 21
- c) 19
- d) 22

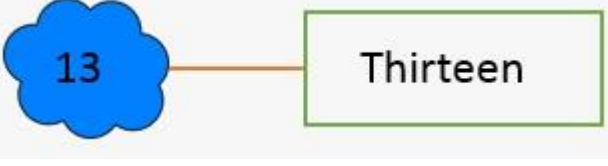
Q17. Which set shows one more banana than given banana?

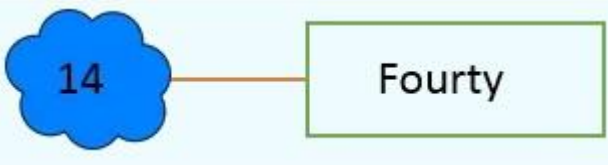


Q18. Which of the following is not correct match?



a) 

b) 

c) 

d) 

Q19. Which of the following is correctly matched?



d) none of these

Q20. The greatest number in the box is _____.

12	2	9	15
13	5	18	11
6	13	8	

- a) 13
- b) 9
- c) 18
- d) 15