



RAMAGYA SCHOOL, NOIDA
I /CYBER/2018-19
OLYMPIAD PRACTICE WORKSHEET

LOGICAL REASONING

Q1. How many are ★ there in 3 boxes?







- a. 21 b. 22 c. 20 d. 19

Q2. If  is to , then  is to _____.

- a.  b.  c.  d. 
-

Q3. Find the correct way to count by 2's.

- a. 
- b. 
- c. 
- d. 

Q4. Look at the alphabets given below.


Left A B C D E F G H I J K L M N O P Q R S T U V W X Y Z **Right**

The 5th alphabet from right is _____.

- a. V b. D c. F d. I

COMPUTER SCIENCE

Q1. Which of the following is NOT a man - made machine ?



- A. Mixer Grinder B. Desktop Computer C. Tree D. Camera

Q2. Which of the following tasks a computer can do for you ?

- A. Drink water B. Eat food C. Play music D. All of these.

Q3. Which of the following runs on electricity?



- A. Glue stick B. Pencil C. Earrings D. Desktop Computer.

Q4. With the help of given type of machine, you can _____

- A. Listen to music
B. Eat food
C. Clean house
D. Plant trees

Q5. Which of the following machines help you in your homework like solving sums ?



- A. Desktop Computer B. Washing machine C. Ovan D. Both (A) and (B)

Q6. How many machine names are hidden in the given grid?

C	A	R	O	Z	Y	T	H
H	K	Z	Y	X	W	Y	S
C	O	M	P	U	T	E	R
Z	G	I	S	W	P	N	Y

- A. 1 B. 3 C. 4 D. 2

Q7. Computer is known as a smart machine, because _____ .

- A. It does not make mistake on its own
- B. It never gets tired
- C. It works very fast
- D. All of these.


Q8. Which of the following parts of computer is used to watch movies ?



A. Desktop Computer



B. Keyboard



C. Mouse



D. Printer

Q9. Which of the following parts of computer can be controlled by the given device?



A. Mouse



B. Keyboard



C. Monitor

D. All of these.

Q10. Select the odd one out (regarding parts of a computer)

- A. Keyboard
- B. Speakers
- C. Mouse
- D. Mobile

Q11. Whatever you type on keyboard is shown on _____



A. Mouse



B. Keyboard



C. Monitor



D. C.P.U

Q12. The given device is called _____. It is used to enter _____ into the computer.

- A. Keyboard, letters and symbols
- B. Speakers, Photos
- C. Mouse, letters and symbols
- D. Printer, Photos



Q13. Which of the following computer part has many keys on it ?



A. Mouse



B. Desktop Computer



C. Keyboard



D. Printer

Q14. Which part of the computer looks like a television?



A. Keyboard



B. Monitor



C. Printer



D. C.P.U

Q15. Which part of the computer supplies power to the computer when the electricity goes off ?

A. C.P.U

B. DVD

C. V.D.U

D. UPS

Q16. A computer monitor can also be called as _____.

A. VDU

B. CD

C. Boot

D. None of these.