



RAMAGYA SCHOOL, NOIDA
I/MATHEMATICS/2018-19
OLYMPIAD PRACTICE WORKSHEET

Q1. Which set shows two more flower than given flower?



a)



b)



c)

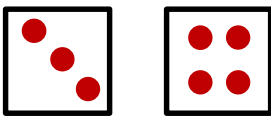


d)




Q2. Which figure shows equal collection?

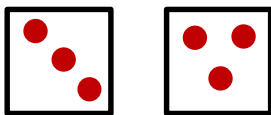
a)



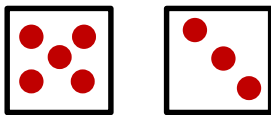
b)



c)



d)

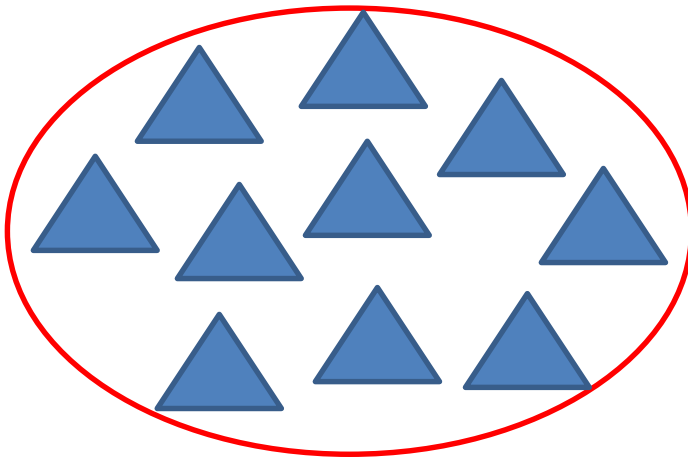


Q3. What comes in between?



- a) 30
- b) 32
- c) 34
- d) 35

Q4. How many triangles are there in the circle?

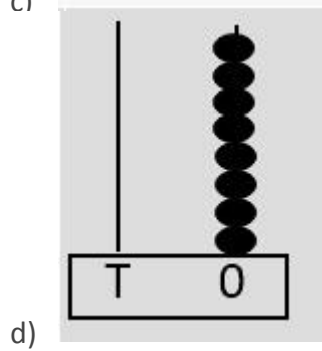
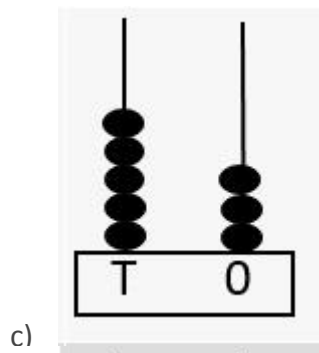
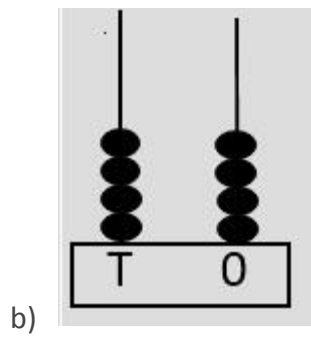
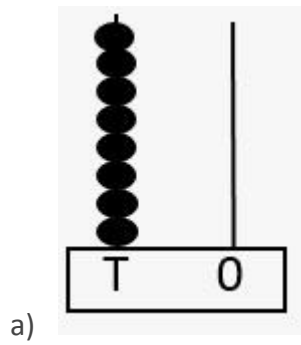


- a) 8
- b) 9
- c) 10
- d) 11

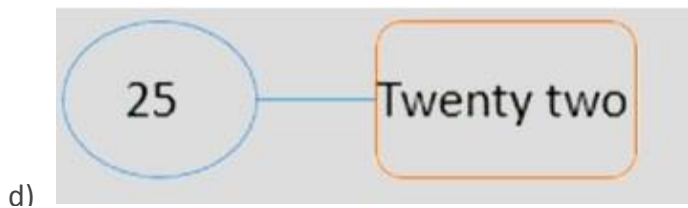
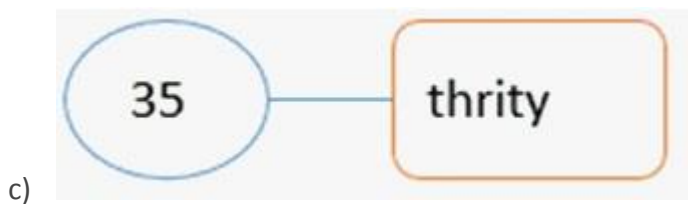
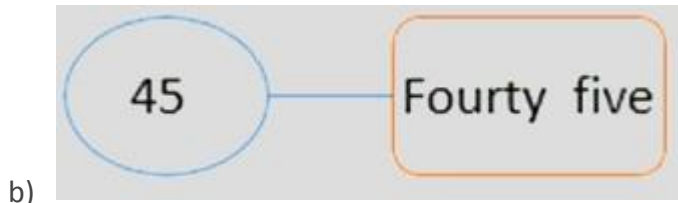
Q5. Counting down from 19, which number comes next?

- a) 17
- b) 18
- c) 19
- d) 20

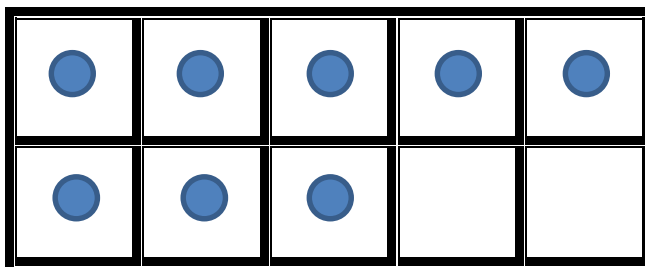
Q6. Which of the following abacus shows the number of given balloons?



Q7. Which of the following is a correct match?



Q8. There are 8 dots on the frame. A full frame has 10 dots. How many more dots do you need to make 10?



- a) 1 more
- b) 2 more
- c) 1 less
- d) 2 less

Q9. How do you write this number using words?

58

- a) Fifteen eight
- b) Fifty eight
- c) Five eight
- d) Five eighteen

Q10. Number before 94 is

- a) 92
- b) 93
- c) 95
- d) 96

Q11. What is on the right?



- a) Both the images
- b) Ice-cream
- c) Toy
- d) None of these

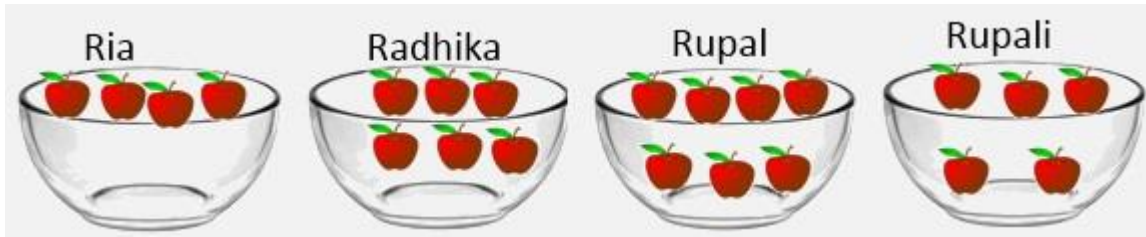
Q12. What is the correct ascending order of 26, 24, 18 and 20?

- a) 26, 20, 18, 24
- b) 20, 26, 18, 24
- c) 18, 20, 24, 26
- d) 18, 20, 26, 24

Q13. Number after 54 is

- a) 58
- b) 57
- c) 53
- d) 55

Q14. Who has largest number of apples?




- a) Ria
- b) Radhika
- c) Rupal
- d) Rupali

Q15. Which statement is true?



- a) Teddy are more than apples
- b) Apples are more than teddy.
- c) Apples are less than teddy.
- d) Teddy are equal to apple.

Q16. How many smilies are on the frame?



- a) 3
- b) 4
- c) 13
- d) 14

Q17. Which of the following are arranged in descending order?

- a) 22, 10, 26, 15, 18
- b) 4, 6, 8, 10, 15
- c) 2, 5, 1, 6, 10
- d) 21, 19, 15, 12, 11

Q18. Identify the objects which can be placed INSIDE and OUTSIDE the house respectively.



Q19. Counting up from 19, which number comes next?

- a) 17
- b) 18
- c) 19
- d) 20

Q20. Which flower is third flower?



- a) P
 - b) Q
 - c) R
 - d) S
-