




RAMAGYA SCHOOL, NOIDA
I /CYBER/2017-18
OLYMPIAD PRACTICE WORKSHEET

LOGICAL REASONING

Q1. Complete the given figure pattern.

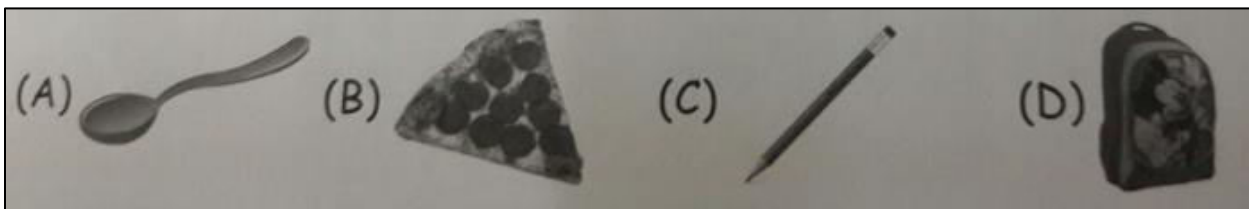


Q2. How many group of six cherries are there ?



(A) 4 (B) 2 (C) 3 (D) 5

Q3. Which of the following is the heaviest ?



Q4. If yesterday was Sunday, what day will be tomorrow?

A. Monday B. Tuesday C. Wednesday D. Saturday

COMPUTER SCIENCE

Q1. Which of the following is NOT a man-made machine ?



Q2. Which of the following task a computer can do for you ?

- A. Drink water B. Eat food C. Play music D. All of these

Q3. How many machine names are hidden in the given grid ?

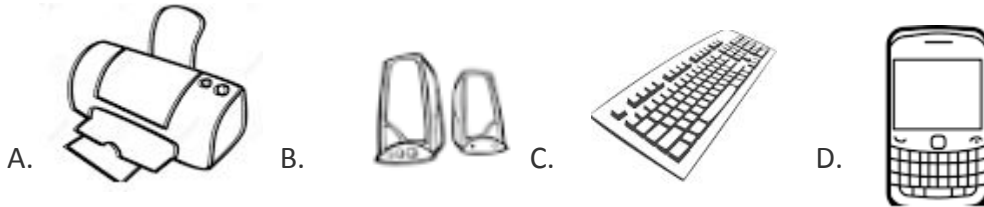
C	A	R	O	Z	Y	T	H
H	K	Z	Y	X	W	Y	S
C	O	M	P	U	T	E	R
Z	G	I	S	W	P	N	Y

- A. 1 B. 2 C. 3 D. 4

Q4. Which of the following parts of a computer is used to watch movies ?

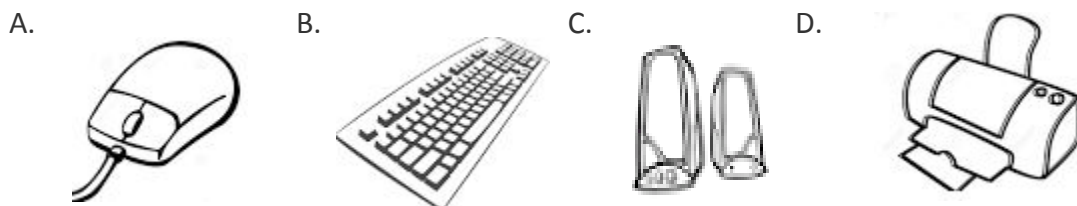


Q5. Select the odd one out (regarding parts of a computer)



Q6. Identify the following:

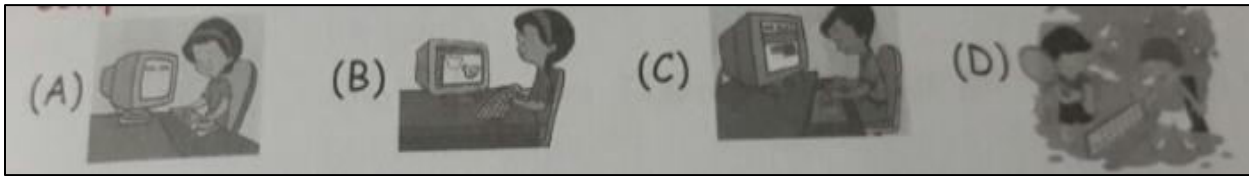
- It can be wirelessly connected to the computer.
- It is used to enter letters and numbers into the computer.



Q7. Which of the following is done on computer for fun ?

- A. Solving sums
- B. Playing games
- C. Selling tickets
- D. Both (A) and (B)

Q8. Which of the following pictures does not show the use of computer?



Q9. Computer in homes CANNOT be used for _____

- A. Typing
- B. Playing Games
- C. Watching movies
- D. Updating passbooks

Q10. Select the word which when unscrambled gives the name of a place, where computers are used.

- A. SMUS
- B. NABK
- C. VOLSE
- D. POME

Q11 Which of the following can be prepared using computer in schools ?

- A. Time - Table
- B. Students Report
- C. Circulars
- D. All of these.

Q12. With the help of computer, you can _____

- A. Take print out
- B. Book tickets
- C. Search information
- D. All of these

Q13. Which of the following statements is INCORRECT ?

- A. Cover of books is designed using computers.
- B. Newspapers are printed with the help of computers.
- C. Computers are used for making building layouts.
- D. At departmental stores, computers are used for making toys.

Q14. Solving sums on computer is _____

- A. Easy and time - consuming.
- B. Difficult and time- consuming.
- C. Easy and fast.
- D. Difficult and fast.

Q15. Which of the following parts of computer can be controlled by the given device ?

A. Mouse

B. Keyboard

C. Monitor

D. All of these



Q16. We watch _____ on computer

A. Cartoons

C. Music

B. Movies

D. Both (A) and (B)