

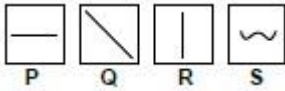


**RAMAGYA SCHOOL, NOIDA**  
**I/MATHEMATICS/2018-19**  
**OLYMPIAD PRACTICE WORKSHEET**

Q1. Order these numbers from lowest to highest: 12, 25, 18, 23, 14

- a) 23, 14, 18, 25, 12
- b) 25, 23, 18, 14, 12
- c) 12, 14, 18, 23, 25
- d) 14, 12, 18, 23, 25

Q2. Which box contains a horizontal line?



- a) R
- b) S
- c) P
- d) Q

Q3. How much is 5 tens and 3 ones?

- a) 503
- b) 53
- c) 5300
- d) 530

Q4. What is the 8th month of the year?



- a) July
- b) October
- c) September
- d) August

Q5. Which one of the following is the number pair of 7?

- a) 1 and 5
- b) 2 and 6
- c) 0 and 7
- d) 3 and 3

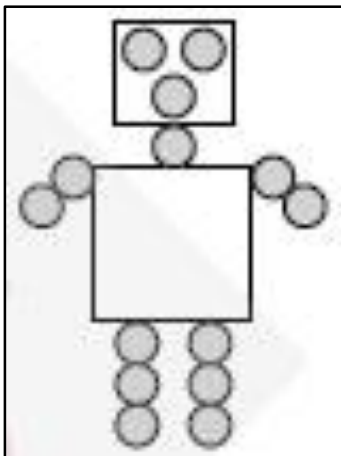
Q6. Look at the alphabets given below.

**Left** A B C D E F G H I J K L M N O P Q R S T U V W X Y Z **Right**

The 5th alphabet from right is \_\_\_\_\_.

- a) D
- b) F
- c) V
- d) I

Q7. How many  are there?

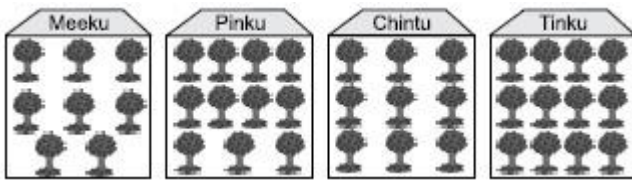


- a) 15
- b) 16
- c) 14
- d) 10

Q8. What is the sum of  $5+7$ ?

- a) 10
- b) 12
- c) 9
- d) 13


. Q9. Which child planted the most trees?







- a) Tinku
- b) Chintu
- c) Pinku
- d) Meeku

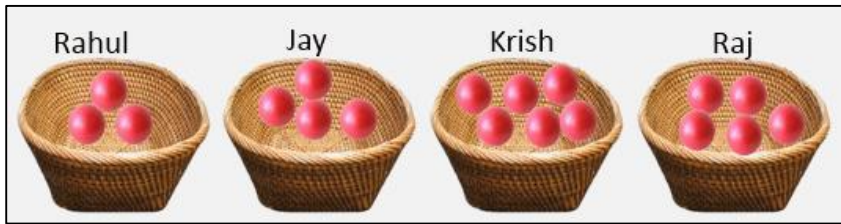
Q10. What comes in between 79 and 81?

- a) 78
- b) 70
- c) 80
- d) 81

Q11. Look at this . Which of these figures is similar?

- a) 
- b) 
- c) 
- d) 

Q12. Who has least number of balls?



- a) Rahul
- b) Jay
- c) Krish
- d) Raj

Q13. The best description of descending order is

- a) Smaller to Bigger
- b) Bigger to Smaller
- c) Bigger to Bigger
- d) None of these

Q14. Use words to write this number.

**36**

- a) Thirty
- b) Twenty
- c) Thirty-six
- d) Thirteen

Q15. How many days are in a week?

- a) 12
- b) 9
- c) 8
- d) 7

Q16. Identify the objects which can be placed INSIDE and OUTSIDE the school respectively.



Q17. Count up from 6. Which number comes next?

- a) 5
- b) 7
- c) 8
- d) 9

Q18. Which of the following are arranged in ascending order?

- a) 76, 18, 54, 26, 49
- b) 49, 26, 76, 54, 18
- c) 18, 26, 49, 54, 76
- d) 76, 54, 49, 26, 18

Q19. November is the \_\_\_\_\_ month of the year.

- a) Fourth
- b) Fifth
- c) Eleventh
- d) Seventh

Q20. Which activity can be done in 2 minutes?

- a) Going to school
- b) Bathing
- c) Starting computer
- d) Playing football