



**RAMAGYA SCHOOL, NOIDA**  
**I/MATHEMATICS/2018-19**  
**OLYMPIAD PRACTICE WORKSHEET**

Q1.  $2 \text{ tens} + 4 \text{ tens} =$  \_\_\_\_\_

- a) 12 tens
- b) 66 tens
- c) 60 tens
- d) 6 tens

Q2. Name the shape which is shaded below?



- a) Pentagon
- b) Triangle
- c) Rectangle
- d) Circle

Q3. Find the missing number.

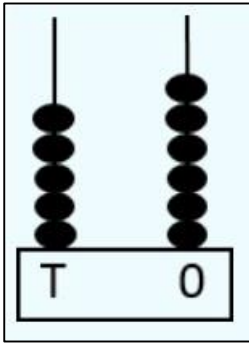


- a) 12
- b) 11
- c) 9
- d) 7

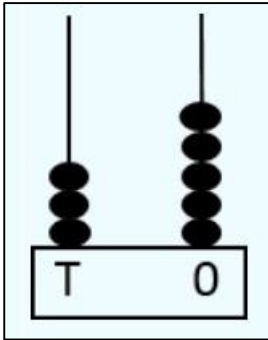
Q4. What comes after 66?

- a) 65
- b) 67
- c) 56
- d) 76

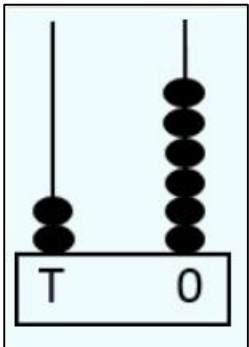
Q5. Which abacus shows 2 more than 24?



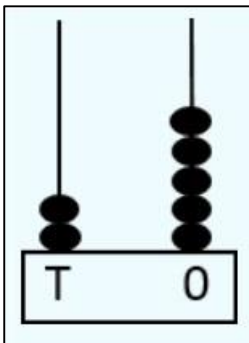
a)



b)



c)

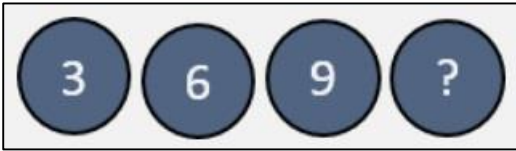


d)

Q6. What is the sum of  $4+6$ ?

- a) 10
- b) 12
- c) 9
- d) 13

Q7. Which number will come next?




- a) 10
- b) 11
- c) 12
- d) 13

Q8. There were 7 rats and 8 cats in the room. How many animals are there in total in the room?

- a) 13
- b) 14
- c) 15
- d) 16

Q9. There are \_\_\_\_\_ more circles (o) in the clown's cap than the face.

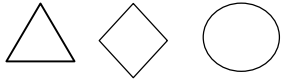


- a) 8
- b) 6
- c) 5
- d) 2

Q10. What comes in between 59 and 61?

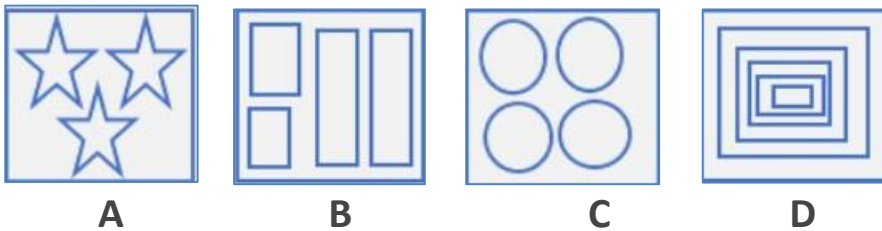
- a) 50
- b) 58
- c) 60
- d) 62

Q11. Which shape is not shown here?



- a) Square
- b) Triangle
- c) Circle
- d) Diamond

Q12. Riya has 4 group of shapes?



In which group she will put a stars?

- a) A
- b) B
- c) C
- d) D

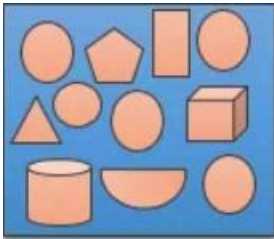
Q13. Which of the following number shows 1 tens + 5 ones?

- a) 6
- b) 16
- c) 15
- d) 51

Q14. There were 3 hens and 4 chicks in the farm. How many birds in total does the farm has?

- a) 7
- b) 8
- c) 9
- d) 10

Q15. How many circles are there in the box?



- a) 8
- b) 5
- c) 4
- d) 3

Q16. Who holds the greatest number?



Ritu

Suhana

Raj

Ryan

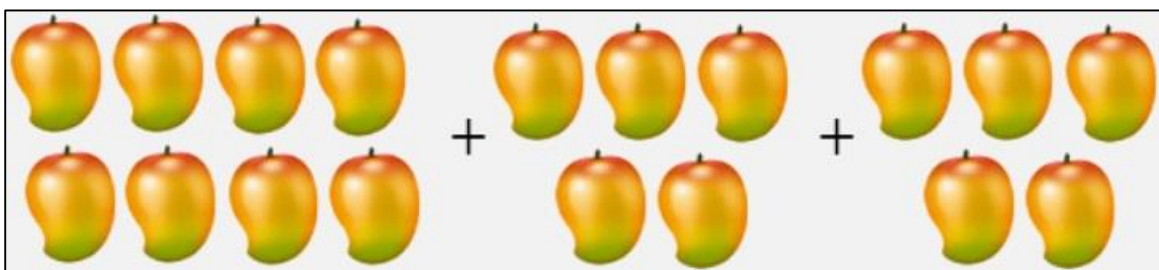
- a) Ritu
- b) Suhana
- c) Raj
- d) Ryan

Q17. Use words to write this number.

# 21

- a) Two-one
- b) Twenty one
- c) twentieth
- d) Twelve

Q18. Dipa picked eight mangoes. Rohan picked five mangoes. Tina picked five mangoes. How many mangoes did the children pick in total?



- a) 14
- b) 16
- c) 18
- d) 19

Q19. November comes after which month?

- a) September
- b) October
- c) December
- d) January

Q20. Which activity can be done in 2 minutes?

- a) Going to school
- b) Bathing
- c) Starting computer
- d) Playing football