



**RAMAGYA SCHOOL, NOIDA**  
**I/MATHEMATICS/2018-19**  
**OLYMPIAD PRACTICE WORKSHEET**

Q1. Rita has 7 dolls



Jaya has 3 dolls



Total number of dolls = \_\_\_\_\_

- a) 12
- b) 11
- c) 10
- d) 9

Q2. 6<sup>th</sup> Ice cream is before ice-cream \_\_\_\_\_.



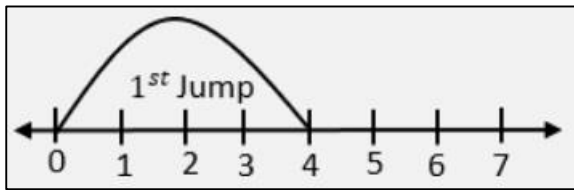
- a) H
- b) G
- c) E
- d) F

Q3. How many balls should be crossed 'X' to show 6 balls uncrossed?



- a) 2
- b) 4
- c) 6
- d) 10

Q4. A girl jumps 4 steps from 0 and then 3 steps. Where will he reach?








- a) 7<sup>th</sup> Point
- b) 6<sup>th</sup> Point
- c) 5<sup>th</sup> Point
- d) 4<sup>th</sup> Point

Q5. If I add this number to 10, I will get 10. What am I adding?

$$10 + \square = 10$$

- a) 11
- b) 1
- c) 0
- d) 10

Q6. The figure comes at place of ' ? ' in the figure pattern given below is \_\_\_\_\_.



Q7. What comes in between 67 and 69?

- a) 68
- b) 64
- c) 60
- d) 62


Q8. Which number come in the place of “?”



$$18 - 6 = ?$$

- a) 12
- b) 21
- c) 11
- d) 13

Q9. In a garden there are



How many birds are there in the garden?

- a) 24
- b) 25
- c) 27
- d) 30

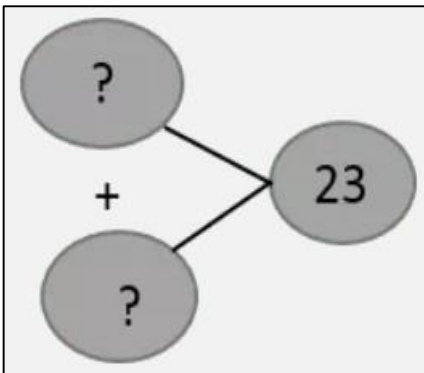
Q10. Keena eats 2 bananas, from a basket of the 10 bananas. How many are left?

- a) 5
- b) 6
- c) 7
- d) 8

Q11. Which of the following are arranged in ascending order?

- a) 45, 18, 64, 5, 18
- b) 67, 59, 35, 4, 79
- c) 24, 46, 67, 88, 99
- d) 76, 54, 16, 12, 7

Q12. Which of the following option will complete the number bond?



- a) 2 tens + 3 tens
- b) 2 ones + 3 tens
- c) 2 tens + 3 ones
- d) 20 ones + 3 tens

Q13. There are



Litchi. How many are left?

- a) 3
- b) 5
- c) 7
- d) 9

Q14. The greatest number among **81, 45, 18, 6, and 54** is

- a) 18
- b) 45
- c) 54
- d) 81

Q15. Which statement is true?



- a) Flowers are equal to Ice-cream
- b) Flowers are less than Ice-cream
- c) Flowers are more than Ice-cream
- d) Ice-cream are more than Flowers

Q16. Number of flowers in both boxes = \_\_\_\_\_



- a)  $8 + 5 = 10$
- b)  $8 + 5 = 13$
- c)  $8 + 4 = 12$
- d)  $8 + 6 = 14$

Q17. Choose the correct number for the number name.

**Thirty six**

- a) 16
- b) 26
- c) 36
- d) 306

Q18. Which is the greatest number?

- a) 2 tens and 2 ones
- b) 3 tens and 3 ones
- c) 3 tens and 2 ones
- d) 2 tens and 1 ones

Q19. 9 ones + 1 ones = \_\_\_\_\_

- a) 19 ones
- b) 1 tens
- c) 91 ones
- d) 22 ones

Q20. Counting down from 39, which number comes next?

- a) 37
- b) 38
- c) 39
- d) 40