



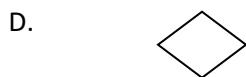
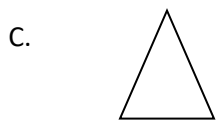
RAMAGYASCHOOL, NOIDA
Class– II/MATHS/SEPTEMBER (2018-19)
OLYMPIAD PRACTICE WORKSHEET

Concept Based Questions

1. The place value of 8 in 9834 is

- A. 8×1
- B. 8×10
- C. 8×100
- D. 8×1000

2. Which of the given shape represents a triangle?



3. What is the digit missing from the box?

$$\begin{array}{r} 9 \quad 8 \quad 5 \quad 7 \\ - 7 \quad 9 \quad \dots \quad 8 \\ \hline \dots \dots \dots \end{array}$$

- A. 6
- B. 7
- C. 8
- D. 9

4. What do we call a shape which has 5 sides?

- A. Heptagon
- B. Hexagon
- C. Octagon
- D. Pentagon

5. If yesterday was Wednesday, what day is the day after tomorrow?

- A. Saturday
- B. Friday
- C. Thursday
- D. Tuesday

Application Based Questions

6. The weight of an apple is best measured in

- A. Inches
- B. Millimetres
- C. Litres
- D. Grams

7. What is the missing number that makes the number sentence true?

----- + 192 + 78 = 330

- A. 60
- B. 70
- C. 58
- D. 59

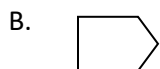
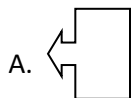
8. How many corners are there in a cube?

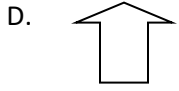
- A. 6
- B. 4
- C. 8
- D. 10

9. There are nine numbers here (5,3,9,11,2,16,26,4,8).
How many are less than 7?

- A. 5
- B. 4
- C. 6
- D. 3





10. Which of the following figure is similar to the given figure-





HOTS Questions

11. Look at the given figure- . What will be the next figure?

- A. 
- B. 
- C. 
- D. 

12. Yesterday was Thursday. What day is tomorrow?

- A. Friday
- B. Saturday
- C. Sunday
- D. Wednesday

13. Which number sentence matches the given figure- 

- A. $4+5$
- B. $5-4$
- C. 20×5
- D. 4×5

14. Look at these numbers – 57 86 71 76

Which two numbers will give a sum of 143 when we add them?

- A. 86 and 76
- B. 71 and 76
- C. 57 and 86
- D. 57 and 86

15. A 5 litre bucket and a 3 litre bucket are full of milk so how much milk was there?

- A. 8 litre
- B. 7 litre
- C. 11 litre
- D. 9 litre

Value Based Questions

16 Rohit has 200 rs. He buys 2 toy cars and 3 pencil boxes. How much money is left with him?



50rs.



25rs.

- A. 50rs
- B. 15rs
- C. 25rs
- D. 100rs

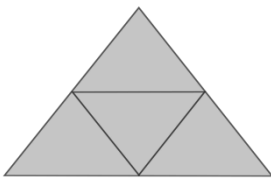
17 Pia put 70 cups in first stack , 80 plastic cups in second stack and 90 plastic cups in third stack. If this pattern continues, how many plastic cups will Pia put in fourth stack?

- A. 100
- B. 108
- C. 106
- D. 110

18. Which instrument would you use to check your body temperature ?

- A. Clock
- B. Thermometer
- C. Tape measure
- D. Weighing balance

19. There are triangles in the given figure.



- A. 5
- B. 7
- C. 6
- D. 8

20 If a month ends on a Wednesday, on what day does the next month begin?

- A. Thursday

- B. Monday
- C. Wednesday
- D. Tuesday