



## RAMAGYA SCHOOL, NOIDA

Class –II/EVS/SEPTEMBER (2018-19)

### OLYMPIAD PRACTICE WORKSHEET

---

#### CONCEPT BASED QUESTIONS

Q.1 The sun sets in the ..... direction



- A. North
- B. South
- C. East
- D. West

Q2. Give two examples of each

- A. Domestic animals
- B. Wild animals
- C. Insects
- D. Water animals

Q.3. Which of the following is called “Big ball of fire”

- A. Moon
- B. Sun
- C. star
- d. Planets

Q.4. I give you honey which is very yummy!! Tell me who am I?



- A. Hen
- B. Sheep
- C. Honey Bee
- D. Cow

Q.5. When moon looks like a ball then it is called.....



- A. Half moon
- B. Full moon
- C. No moon
- D. All options are correct

**APPLICATION BASED QUESTIONS**

Q.6 Encircle the odd

- A. Foot leg knee hand
- B. Teeth tongue hair lips
- C. Hand nose eyes ears
- D. Arm shoulder teeth hand

Q.7.Fill in the blanks with these words (Cereal, fruit, vegetable)




A. An orange is a .....

B. Potato is a .....

C. Pineapple is a .....

D. Rice is a .....

Q.8. Draw diagram of one fruit, one vegetable and one cereal



Q.9 Which of the following is not a creeper

A. Watermelon



B. Pumpkin



C. Muskmelon



D. Cucumber



Q.10. Fill in the missing alphabets

A.  This is an a \_ m.

B.  This is a m \_ u \_ t h.

**HOTS QUESTIONS**

Q.11. Match the following

- |         |            |
|---------|------------|
| Tree    | Rose       |
| Shrub   | Mango      |
| Herb    | Watermelon |
| Creeper | Pea        |
| Climber | Grass      |

Q.12. How many planets are there in our Solar system

- A. 8 planets
- B. 9 planets
- C. 10 planets
- D. 11 planets

Q.13. Fill in the blanks

A. We get cotton from ..... (Sheep/plant)



B. We get wool from ..... (Sheep/plant)



Q.14. Unscramble these spellings

- A. THERA
- B. NSU
- C. ATSSR
- D. OOMN

Q.15. How much water do we need to drink daily on average?



- A. 3 liters/day
- B. 7 liters/day
- C. 8 liters/day
- D. 12 liters/day

**VALUE BASED QUESTIONS**

Q.16. Bamboo is a .....



- A. Tree
- B. Grass
- C. Shrub
- D. Herb

Q.17 Why we need to eat food?

- A. to get energy
- B. to grow
- C. to finish food
- D. to be healthy

Q.18 Give one word answer

- A. We see with our .....
- B. We taste with our .....
- C. We hear with our .....
- D. We smell with our .....

Q. 19 Pick out the word from the box and fill up the blank.

Sources of water

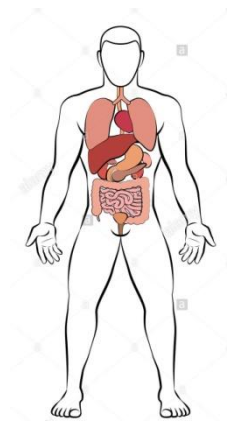
- .....
- .....
- .....
- .....

Drinking Cleaning Watering
Tap River Washing Lake
Well washing

Uses of water

- .....
- .....
- .....
- .....

Q.20 Identify and name the different parts of the body.



.....

.....