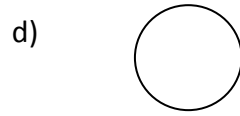
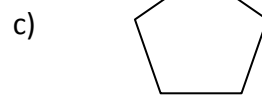
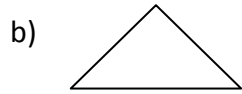


18) Identify the pentagon from following figures?



19) find all the factors of 18 ?

a)1,2,3,7,11,18

c)1,3,9,7,11,18

b)1,2,3,6,9,18

d)1,3,6,9,12,18

20) Study the pattern and fill in the blank with suitable number?

5,10,15, _____ 25,30

a)8

b)12

c)14

d)20